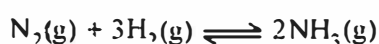


NEET: 2019 [QUESTION WITH ANSWER]

1. For the chemical reaction



the correct option is :

(1) $-\frac{d[\text{N}_2]}{dt} = 2\frac{d[\text{NH}_3]}{dt}$

(2) $-\frac{d[\text{N}_2]}{dt} = \frac{1}{2}\frac{d[\text{NH}_3]}{dt}$

(3) $3\frac{d[\text{H}_2]}{dt} = 2\frac{d[\text{NH}_3]}{dt}$

(4) $-\frac{1}{3}\frac{d[\text{H}_2]}{dt} = -\frac{1}{2}\frac{d[\text{NH}_3]}{dt}$

Ans. (2)

2. The non-essential amino acid among the following is

- (1) leucine (2) alanine
(3) lysine (4) valine

Ans. (2)

3. For an ideal solution, the correct option is

- (1) $\Delta_{\text{mix}} V \neq 0$ at constant T and P
(2) $\Delta_{\text{mix}} H = 0$ at constant T and P
(3) $\Delta_{\text{mix}} G = 0$ at constant T and P
(4) $\Delta_{\text{mix}} S = 0$ at constant T and P

Ans. (2)

4. The manganate and permanganate ions are tetrahedral, due to

- (1) There is no π -bonding
(2) The π -bonding involves overlap of p-orbitals of oxygen with p-orbitals of manganese
(3) The π -bonding involves overlap of d-orbitals of oxygen with d-orbitals of manganese
(4) The π -bonding involves overlap of p-orbitals of oxygen with d-orbitals of manganese

Ans. (4)

5. Which will make basic buffer ?

- (1) 100 mL of 0.1 M CH_3COOH + 100 mL of 0.1 M NaOH
(2) 100 mL of 0.1 M HCl + 200 mL of 0.1 M NH_4OH
(3) 100 mL of 0.1 M HCl + 100 mL of 0.1 M NaOH
(4) 50 mL of 0.1 M NaOH + 25 mL of 0.1 M CH_3COOH

Ans. (2)

6. The number of moles of hydrogen molecules required to produce 20 moles of ammonia through Haber's process is

- (1) 20 (2) 30
(3) 40 (4) 10

Ans. (2)

7. Which of the following diatomic molecular species has only π bonds according to Molecular Orbital Theory ?

- (1) N_2 (2) C_2
(3) Be_2 (4) O_2

Ans. (2)

8. The biodegradable polymer is

- (1) nylon-2-nylon-6 (2) nylon-6
(3) Buna-S (4) nylon-6, 6

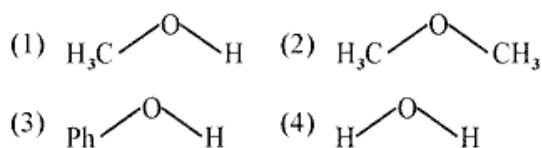
Ans. (1)

9. Which of the following reactions are disproportionation reaction ?

- (1) $2\text{Cu}^+ \rightarrow \text{Cu}^{2+} + \text{Cu}^0$
(2) $3\text{MnO}_4^{2-} + 4\text{H}^+ \rightarrow 2\text{MnO}_4^- + \text{MnO}_2 + 2\text{H}_2\text{O}$
(3) $2\text{KMnO}_4 \xrightarrow{\Delta} \text{K}_2\text{MnO}_4 + \text{MnO}_2 + \text{O}_2$
(4) $2\text{MnO}_4^- + 3\text{Mn}^{2+} + 2\text{H}_2\text{O} \rightarrow 5\text{MnO}_2 + 4\text{H}^+$


Ans. (4)

10. The compound that is most difficult to protonate is



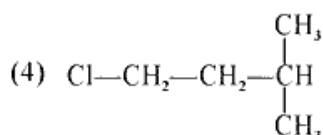
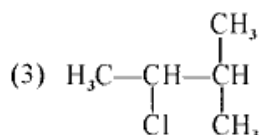
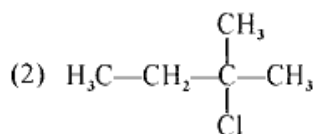
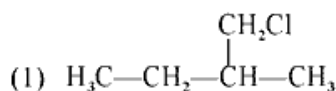
Ans. (3)

11. Which of the following species is **not** stable ?



Ans. (3)

12. An alkene "A" on reaction with O_3 and $\text{Zn}-\text{H}_2\text{O}$ gives propanone and ethanal in equimolar ratio. Addition of HCl to alkene "A" gives "B" as the major product. The structure of product "B" is



Ans. (2)

13. Match the following :

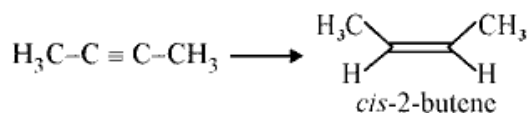
- | | |
|----------------------|-----------------------------------|
| (a) Pure nitrogen | (i) Chlorine |
| (b) Haber process | (ii) Sulphuric acid |
| (c) Contact process | (iii) Ammonia |
| (d) Deacon's process | (iv) Sodium azide or Barium azide |

Which of the following is the **correct** option ?

- | (a) | (b) | (c) | (d) |
|-----------|-------|-------|-------|
| (1) (ii) | (iv) | (i) | (iii) |
| (2) (iii) | (iv) | (ii) | (i) |
| (3) (iv) | (iii) | (ii) | (i) |
| (4) (i) | (ii) | (iii) | (iv) |

Ans. (3)

14. The most suitable reagent for the following conversion, is



- (1) H_2 , Pd/C, quinoline
 (2) Zn/HCl
 (3) $\text{Hg}^{2+} / \text{H}^+$, H_2O
 (4) Na / liquid NH_3

Ans. (1)

15. The **correct** order of the basic strength of methyl substituted amines in aqueous solution is

- (1) $(\text{CH}_3)_3\text{N} > \text{CH}_3\text{NH}_2 > (\text{CH}_3)_2\text{NH}$
 (2) $(\text{CH}_3)_3\text{N} > (\text{CH}_3)_2\text{NH} > \text{CH}_3\text{NH}_2$
 (3) $\text{CH}_3\text{NH}_2 > (\text{CH}_3)_2\text{NH} > (\text{CH}_3)_3\text{N}$
 (4) $(\text{CH}_3)_2\text{NH} > \text{CH}_3\text{NH}_2 > (\text{CH}_3)_3\text{N}$

Ans. (4)

16. A gas at 350 K and 15 bar has molar volume 20 percent smaller than that for an ideal gas under the same conditions. The **correct** option about the gas and its compressibility factor (Z) is

- (1) $Z > 1$ and repulsive forces are dominant
 (2) $Z < 1$ and attractive forces are dominant
 (3) $Z < 1$ and repulsive forces are dominant
 (4) $Z > 1$ and attractive forces are dominant

Ans. (2)

17. The number of sigma (σ) and pi (π) bonds in pent-2-en-4-yne is

- (1) 8σ bonds and 5π bonds
 (2) 11σ bonds and 2π bonds
 (3) 13σ bonds and no π bond
 (4) 10σ bonds and 3π bonds

Ans. (4)

18. For the second period elements the **correct** increasing order of first ionisation enthalpy is

- (1) $\text{Li} < \text{B} < \text{Be} < \text{C} < \text{O} < \text{N} < \text{F} < \text{Ne}$
 (2) $\text{Li} < \text{B} < \text{Be} < \text{C} < \text{N} < \text{O} < \text{F} < \text{Ne}$
 (3) $\text{Li} < \text{Be} < \text{B} < \text{C} < \text{O} < \text{N} < \text{F} < \text{Ne}$
 (4) $\text{Li} < \text{Be} < \text{B} < \text{C} < \text{N} < \text{O} < \text{F} < \text{Ne}$

Ans. (1)

19. Among the following, the narrow spectrum antibiotic is

- (1) ampicillin (2) amoxycillin
(3) chloramphenicol (4) penicillin G

Ans. (4)

20. The method used to remove temporary hardness of water is

- (a) Clark's method (b) Ion-exchange method
(c) Synthetic resins method
(d) Calgon's method

Ans. (1)

21. Which of the following series of transitions in the spectrum of hydrogen atom falls in visible region ?

- (1) Balmer series (2) Paschen series
(3) Brackett series (4) Lyman series

Ans. (1)

22. Match the Xenon compounds in **Column-I** with its structure in **Column-II** and assign the correct code :

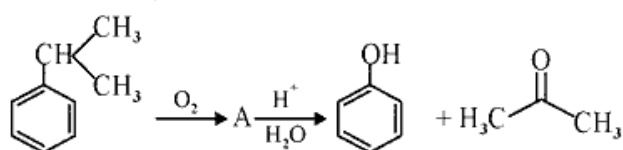
- | Column-I | Column-II |
|---------------------|----------------------------|
| (a) XeF_4 | (i) pyramidal |
| (b) XeF_6 | (ii) square planar |
| (c) XeOF_4 | (iii) distorted octahedral |
| (d) XeO_3 | (iv) square pyramidal |

Code :

- | (a) | (b) | (c) | (d) |
|-----------|-------|-------|------|
| (1) (ii) | (iii) | (iv) | (i) |
| (2) (ii) | (iii) | (i) | (iv) |
| (3) (iii) | (iv) | (i) | (ii) |
| (4) (i) | (ii) | (iii) | (iv) |

Ans. (1)

23. The structure of intermediate A in the following reaction, is



- (1)
- (2)
- (3)
- (4)

Ans. (1)

24. The correct structure of tribromooctaoxide is

- (1)
- (2)
- (3)
- (4)

Ans. (4)

25. Which is the correct thermal stability order for H_2E (E = O, S, Se, Te and Po) ?

- (1) $\text{H}_2\text{O} < \text{H}_2\text{S} < \text{H}_2\text{Se} < \text{H}_2\text{Te} < \text{H}_2\text{Po}$
(2) $\text{H}_2\text{Po} < \text{H}_2\text{Te} < \text{H}_2\text{Se} < \text{H}_2\text{S} < \text{H}_2\text{O}$
(3) $\text{H}_2\text{Se} < \text{H}_2\text{Te} < \text{H}_2\text{Po} < \text{H}_2\text{O} < \text{H}_2\text{S}$
(4) $\text{H}_2\text{S} < \text{H}_2\text{O} < \text{H}_2\text{Se} < \text{H}_2\text{Te} < \text{H}_2\text{Po}$

Ans. (2)

26. In which case change in entropy is negative ?

- (1) Expansion of a gas at constant temperature
(2) Sublimation of solid to gas
(3) $2\text{H}(\text{g}) \rightarrow \text{H}_2(\text{g})$
(4) Evaporation of water

Ans. (3)

27. A compound is formed by cation C and anion A. The anions form hexagonal close packed (hcp) lattice and the cations occupy 75% of octahedral voids. The formula of the compound is

- (1) C_3A_2 (2) C_3A_4
(3) C_4A_3 (4) C_2A_3

Ans. (2)

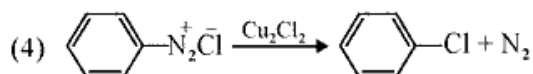
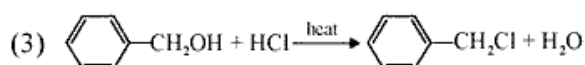
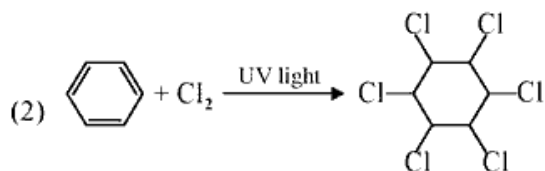
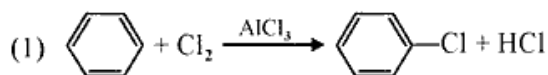
28. Among the following, the one that is not a green house gas is

- (1) methane (2) ozone
(3) sulphur dioxide (4) nitrous oxide

Ans. (3)

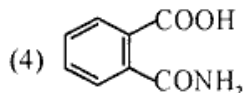
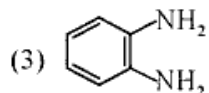
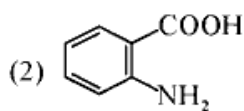
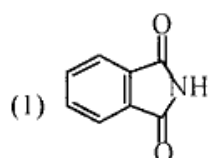
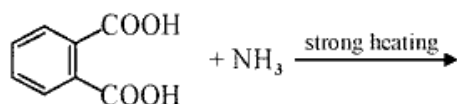
29. Identify the **Incorrect** statement related to PCl_5 from the following :
- (1) Two axial P–Cl bonds make an angle of 180° with each other
 - (2) Axial P–Cl bonds are longer than equatorial P–Cl bonds
 - (3) PCl_5 molecule is non-reactive
 - (4) Three equatorial P–Cl bonds make an angle of 120° with each other
- Ans.* (3)
30. Which of the following is an amphoteric hydroxide ?
- (1) $\text{Ca}(\text{OH})_2$
 - (2) $\text{Mg}(\text{OH})_2$
 - (3) $\text{Be}(\text{OH})_2$
 - (4) $\text{Sr}(\text{OH})_2$
- Ans.* (3)
31. 4d, 5p, 5f and 6p orbitals are arranged in the order of decreasing energy. The **correct** option is
- (1) $6p > 5f > 5p > 4d$
 - (2) $6p > 5f > 4d > 5p$
 - (3) $5f > 6p > 4d > 5p$
 - (4) $5f > 6p > 5p > 4d$
- Ans.* (4)
32. For the cell reaction
- $$2\text{Fe}^{3+}(\text{aq}) + 2\text{I}^{-}(\text{aq}) \rightarrow 2\text{Fe}^{2+}(\text{aq}) + \text{I}_2(\text{aq})$$
- $E_{\text{cell}}^{\ominus} = 0.24 \text{ V}$ at 298 K. The standard Gibbs energy ($\Delta_r G^{\ominus}$) of the cell reaction is [Given that Faraday constant $F = 96500 \text{ C mol}^{-1}$]
- (1) $-23.16 \text{ kJ mol}^{-1}$
 - (2) $46.32 \text{ kJ mol}^{-1}$
 - (3) $23.16 \text{ kJ mol}^{-1}$
 - (4) $-46.32 \text{ kJ mol}^{-1}$
- Ans.* (4)
33. Conjugate base for Bronsted acids H_2O and HF are
- (1) H_3O^+ and F^{-} , respectively
 - (2) OH^{-} and F^{-} , respectively
 - (3) H_3O^+ and H_2F^+ , respectively
 - (4) OH^{-} and H_2F^+ , respectively
- Ans.* (2)
34. Which one is malachite from the following ?
- (1) $\text{Cu}(\text{OH})_2$
 - (2) Fe_3O_4
 - (3) $\text{CuCO}_3 \cdot \text{Cu}(\text{OH})_2$
 - (4) CuFeS_2
- Ans.* (3)
35. pH of a saturated solution of $\text{Ca}(\text{OH})_2$ is 9. The solubility product (K_{sp}) of $\text{Ca}(\text{OH})_2$ is :
- (1) 0.25×10^{-10}
 - (2) 0.125×10^{-5}
 - (3) 0.5×10^{-10}
 - (4) 0.5×10^{-15}
- Ans.* (4)
36. Which of the following is **incorrect** statement ?
- (1) SiCl_4 is easily hydrolysed ?
 - (2) GeX_4 (X = F, Cl, Br, I) is more stable than GeX_2
 - (3) SnF_4 is ionic in nature
 - (4) PbF_4 is covalent in nature
- Ans.* (4)
37. Which mixture of the solutions will lead to the formation of negatively charged colloidal $[\text{AgI}]^{-}$ sol. ?
- (1) 50 mL of 1 M AgNO_3 + 50 mL of 2 M KI
 - (2) 50 mL of 2 M AgNO_3 + 50 mL of 1.5 M KI
 - (3) 50 mL of 0.1 M AgNO_3 + 50 mL of 0.1 M KI
 - (4) 50 mL of 1 M AgNO_3 + 50 mL of 1.5 M KI
- Ans.* (1)
38. The mixture that forms maximum boiling azeotrope is
- (1) Ethanol + Water
 - (2) Acetone + Carbon disulphide
 - (3) Heptane + Octane
 - (4) Water + Nitric acid
- Ans.* (4)
39. For a cell involving one electron $E_{\text{cell}}^{\ominus} = 0.59 \text{ V}$ at 298 K, the equilibrium constant for the cell reaction is
- [Given that $\frac{2.303 RT}{F} = 0.059 \text{ V}$ at $T = 298 \text{ K}$]
- (1) 1.0×10^5
 - (2) 1.0×10^{10}
 - (3) 1.0×10^{30}
 - (4) 1.0×10^2
- Ans.* (2)

40. Among the following, the reaction that proceeds through an electrophilic substitution, is



Ans. (1)

41. The major product of the following reaction is



Ans. (1)

42. What is the **correct** electronic configuration of the central atom in K₄[Fe(CN)₆] based on crystal field theory ? <http://www.xamstudy.com>



Ans. (1)

43. If the rate constant for a first order reaction is k, the time (t) required for the completion of 99% of the reaction is given by

(1) t = 6.909/k (2) t = 4.606/k

(3) t = 2.303/k (4) t = 0.693/k

Ans. (2)

44. Under isothermal condition, a gas at 300 K expands from 0.1 L to 0.25 L against a constant external pressure of 2 bar. The work done by the gas is [Given that 1 L bar = 100 J]

- (1) 5 kJ (2) 25 J
(3) 30 J (4) - 30 J

Ans. (4)

45. Enzymes that utilize ATP in phosphate transfer require an alkaline earth metal (M) as the cofactor. M is

- (1) Mg (2) Ca
(3) Sr (4) Be

Ans. (1)

46. Cells in G₀ phase

- (1) enter the cell cycle
(2) suspend the cell cycle
(3) terminate the cell cycle
(4) exit the cell cycle

Ans. (2)

47. Phloem in gymnosperms lacks :

- (1) Sieve tubes only
(2) Companion cells only
(3) Both sieve tubes and companion cells
(4) Albuminous cells and sieve cells

Ans. (3)

48. Which of the following factors is responsible for the formation of concentrated urine ?

- (1) Maintaining hyperosmolarity towards inner medullary interstitium in the kidneys
(2) Secretion of erythropoietin by Juxtaglomerular complex
(3) Hydrostatic pressure during glomerular filtration
(4) Low levels of antidiuretic hormone

Ans. (1)

49. Match the hominids with their **correct** brain size

- | | |
|----------------------------------|------------------|
| (a) <i>Homo habilis</i> | (i) 900 cc |
| (b) <i>Homo neanderthalensis</i> | (ii) 1350 cc |
| (c) <i>Homo erectus</i> | (iii) 650-800 cc |
| (d) <i>Homo sapiens</i> | (iv) 1400 cc |

Ans. (2)

50. Match the following genes of the Lac operon with their respective products :

- | | |
|------------|----------------------------|
| (a) i gene | (i) β -galactosidase |
| (b) z gene | (ii) Permease |
| (c) a gene | (iii) Repressor |
| (d) y gene | (iv) Transacetylase |

- | | | | |
|-----------|-------|------|------|
| (a) | (b) | (c) | (d) |
| (1) (iii) | (i) | (ii) | (iv) |
| (2) (iii) | (i) | (iv) | (ii) |
| (3) (iii) | (iv) | (i) | (ii) |
| (4) (i) | (iii) | (ii) | (iv) |

Ans. (2)

51. In some plants, the female gamete develops into embryo without fertilization. Their phenomenon is known as :

- (1) Parthenocarpy
- (2) Syngamy
- (3) Parthenogenesis
- (4) Autogamy

Ans. (3)

52. Under which of the following conditions will there be no change in the reading frame of following mRNA?

5' AACAGCGGUGCUAAU 3'

- (1) Deletion of G from 5th position
- (2) Insertion of A and G at 4th and 5th positions respectively
- (3) Deletion of GGU from 7th, 8th and 9th positions
- (4) Insertion of G at 5th positions

Ans. (3)

53. Which of the following muscular disorder is inherited?

- (1) Muscular dystrophy
- (2) Myasthenia gravis
- (3) Botulism
- (4) Tetany

Ans. (1)

54. Select the correct options

- (1) 11th and 12th pairs of ribs are connected to the sternum with the help of hyaline cartilage
- (2) Each rib is a flat thin bone and all the ribs are connected dorsally to the thoracic vertebrae and ventrally to the sternum
- (3) There are seven pairs of vertebrosteral, three pairs of vertebrochondral and two pairs of vertebral ribs
- (4) 8th, 9th and 10th pairs of ribs articulate directly with the sternum

Ans. (3)

55. Grass leaves curl inwards during very dry weather. Select the most appropriate reason from the following

- (1) Flaccidity of bulliform cells
- (2) Shrinkage of air spaces in spongy mesophyll
- (3) Tyloses in vessels
- (4) Closure of stomata

Ans. (1)

56. In *Antirrhinum* (Snapdragon), a red flower was crossed with a white flower and F₁ generation, pink floweres were obtained. When pink flowers were selfed, the F₂ generation showed white, red and pink floweres. Choose the **incorrect** statements from the following :

- (1) Pink colour in F₁ is due to incomplete dominance
- (2) Ratio of F₂ is $\frac{1}{4}$ (Red) : $\frac{2}{4}$ (Pink) : $\frac{1}{4}$ (White)
- (3) Law of Segregation does not apply in this experiment
- (4) The experiment does not follow the Principle of Dominance

Ans. (3)

57. Xylem translocates :

- (1) Water and minerals salts only
- (2) Water, mineral salts and some organic nitrogen only
- (3) Water, minerals salts, some organic nitrogen and hormones
- (4) Water only

Ans. (3)

58. Placentation, in which ovules develop on the inner wall of the ovary or in peripheral part, is

- (1) Axile
- (2) Parietal
- (3) Free central
- (4) Basal

Ans. (2)

59. Which of the following glucose transporters is insulin-dependent?

- (1) GLUT II
- (2) GLUT III
- (3) GLUT IV
- (4) GLUT I

Ans. (4)

60. Select the **incorrect** statement

- (1) Inbreeding is essential to evolve purelines in any animal
- (2) Inbreeding selects harmful recessive genes that reduce fertility and productivity
- (3) Inbreeding helps in accumulation of superior genes and elimination of undesirable genes
- (4) Inbreeding increases homozygosity

Ans. (2)

61. Select the **incorrect** statement.

- (1) In male grasshoppers, 50% of sperms have no sex-chromosome.
- (2) In domesticated fowls, sex of progeny depends on the type of sperm rather than egg.
- (3) Human males have one of their sex-chromosome much shorter than the other
- (4) Male fruit fly is heterogametic

Ans. (2)

62. Colostrum, the yellowish fluid, secreted by mother during the initial days of lactation is very essential to impart immunity to the newborn infants because it contains:

- (1) Monocytes
- (2) Macrophages
- (3) Immunoglobulin A
- (4) Natural killer cells

Ans. (3)

63. A gene locus has two alleles A, a. If the frequency of dominant allele A is 0.4, then what will be the frequency of homozygous dominant, heterozygous and homozygous recessive individuals in the population?

- (1) 0.16 (AA); 0.24 (Aa); 0.36 (aa)
- (2) 0.16 (AA); 0.48 (Aa); 0.36 (aa)
- (3) 0.16 (AA); 0.36 (Aa); 0.48 (aa)
- (4) 0.36 (AA); 0.48 (Aa); 0.16 (aa)

Ans. (2)

64. Which of the following statements regarding mitochondria is **incorrect** ?

- (1) Enzymes of electron transport are embedded in outer membrane.
- (2) Inner membrane is convoluted with infoldings
- (3) Mitochondrial matrix contains single circular DNA molecule and ribosomes.
- (4) Outer membrane is permeable to monomers of carbohydrates, fats and proteins.

Ans. (1)

65. What triggers activation of protoxin to active Bt toxin of *Bacillus thuringiensis* in boll worm?

- (1) Moist surface of midgut
- (2) Alkaline pH of gut
- (3) Acidic pH of stomach
- (4) Body temperature

Ans. (2)

66. It takes very long time for pineapple plants to produce flowers. Which combination of hormones can be applied to artificially induce flowering in pineapple plants throughout the year to increase yield?

- (1) Gibberellin and Cytokinin
- (2) Gibberellin and Abscisic acid
- (3) Cytokinin and Abscisic acid
- (4) Auxin and Ethylene

Ans. (4)

67. In a species, the weight of newborn ranges from 2 to 5 kg. 97% of the newborn with an average weight between 3 to 3.3 kg survive whereas 99% of the infants born with weights from 2 to 2.5 kg or 4.5 to 5 kg die. Which type of selection process is taking place?

- (1) Stabilizing Selection
- (2) Disruptive Selection
- (3) Cyclical Selection
- (4) Directional Selection

Ans. (1)

68. Which of the following can be used as a biocontrol agent in the treatment of plant disease?

- (1) Chlorella
- (2) Anabaena
- (3) Lactobacillus
- (4) Trichoderma

Ans. (4)

69. Concanavalin A is:

- (1) an essential oil
- (2) a lectin
- (3) a pigment
- (4) an alkaloid

Ans. (2)

70. Match the following hormones with the respective disease:

- | | |
|--------------------|-------------------------|
| (a) Insuline | (i) Addison's disease |
| (b) Thyroxin | (ii) Diabetes insipidus |
| (c) Corticoids | (iii) Acromegaly |
| (d) Growth Hormone | (iv) Goitre |
| | (v) Diabetes mellitus |

Select the correct option

- | (a) | (b) | (c) | (d) |
|----------|------|-------|-------|
| (1) (ii) | (iv) | (iii) | (i) |
| (2) (v) | (iv) | (i) | (iii) |
| (3) (ii) | (iv) | (i) | (iii) |
| (4) (v) | (i) | (ii) | (iii) |

Ans. (2)

71. What is the fate of the male gametes discharged in the synergid?

- (1) All fuse with the egg.
- (2) One fuses with the egg, other(s) fuse(s) with synergid nucleus
- (3) One fuses with the egg and other fuses with central cell nuclei
- (4) One fuses with the egg, other(s) degenerate(s) in the synergid.

Ans. (3)

72. Match the following structures with their respective location in organs:

- | | |
|--------------------------|-----------------------|
| (a) Crypts of Lieberkuhn | (i) Pancreas |
| (b) Glisson's Capsule | (ii) Duodenum |
| (c) Islets of Langerhans | (iii) Small intestine |
| (d) Brunner's Glands | (iv) Liver |

Select the correct option from the following:

- | | | | |
|-----------|------|------|-------|
| (a) | (b) | (c) | (d) |
| (1) (ii) | (iv) | (i) | (iii) |
| (2) (iii) | (iv) | (i) | (ii) |
| (3) (iii) | (ii) | (i) | (iv) |
| (4) (iii) | (i) | (ii) | (iv) |

Ans. (2)

73. Which one of the following is **not** a method of in situ conservation of biodiversity?

- (1) Wildlife Sanctuary
- (2) Botanical Garden
- (3) Sacred Grove
- (4) Biosphere Reserve

Ans. (2)

74. Expressed Sequence Tags (ESTs) refers to:

- (1) Polypeptide expression
- (2) DNA polymorphism
- (3) Novel DNA sequences
- (4) Genes expressed as RNA

Ans. (4)

75. Which of the following ecological pyramids is generally inverted?

- (1) Pyramid of energy
- (2) Pyramid of biomass in a forest
- (3) Pyramid of biomass in a sea
- (4) Pyramid of numbers in grassland

Ans. (3)

76. Which of the following pairs of gases is mainly responsible for green house effect?

- (1) Oxygen and Nitrogen
- (2) Nitrogen and Sulphur dioxide
- (3) Carbon dioxide and Methane
- (4) Ozone and Ammonia

Ans. (3)

77. Which of the following immune responses is responsible for rejection of kidney graft?
- (1) Humoral immune response
 - (2) Inflammatory immune response
 - (3) Cell-mediated immune response
 - (4) Auto-immune response

Ans. (3)

78. Pinus seed **cannot** germinate and establish without fungal association. This is because:

- (1) it has obligate association with mycorrhizae
- (2) it has very hard seed coat
- (3) its seeds contain inhibitors that prevent germination.
- (4) Its embryo is immature.

Ans. (1)

79. Which of the statements given below is **not** true about formation of Annual Rings in trees?

- (1) Differential activity of cambium cause light and dark bands of tissue-early and late wood respectively.
- (2) Activity of cambium depends upon variation in climate
- (3) Annual rings are not prominent in trees of temperate region
- (4) Annual ring is a combination of spring wood and autumn wood produced in a year.

Ans. (3)

80. Purines found both in DNA and RNA are:

- (1) Adenine and guanine
- (2) Guanine and cytosine
- (3) Cytosine and thymine
- (4) Adenine and thymine

Ans. (1)

81. Variations caused by mutation, as proposed by Hugo de Vries, are:

- (1) random and directionless
- (2) small and directional
- (3) small and directionless
- (4) random and directional

Ans. (1)

82. Which of the following statements is **not** correct?

- (1) The hydrolytic enzymes of lysosomes are active under acidic pH.
- (2) Lysosomes are membrane bound structures.
- (3) Lysosomes are formed by the process of packaging in the endoplasmic reticulum
- (4) Lysosomes have numerous hydrolytic enzymes.

Ans. (3)

83. The shorter and longer arms of a submetacentric chromosomes are referred to as:

- (1) p-arm and q-arm respectively
- (2) q-arm and p-arm respectively
- (3) m-arm and n-arm respectively
- (4) s-arm and l-arm respectively

Ans. (1)

84. The ciliated epithelial cells are required to move particles or mucus in a specific direction. In humans, these cells are mainly present in:

- (1) Fallopian tubes and Pancreatic duct
- (2) Eustachian tube and Salivary duct
- (3) Bronchioles and Fallopian tubes
- (4) Bile duct and Bronchioles

Ans. (3)

85. Which of the following statements is **incorrect**?

- (1) Claviceps is a source of many alkaloids and LSD
- (2) Conidia are produced exogenously and ascospores endogenously.
- (3) Yeasts have filamentous bodies with long thread-like hyphae.
- (4) Morels and truffles are edible delicacies.

Ans. (3)

86. Match Column -I with Column -II.

Column I	Column II
(a) Saprophyte	(i) Symbiotic association of fungi with plant roots
(b) Parasite	(ii) Decomposition of dead organic materials
(c) Lichens	(iii) Living on living plants or animals
(d) Mycorrhiza	(iv) Symbiotic association of algae and fungi

Choose the **correct** answer from the options given below:

- | | | | | |
|-----|-------|-------|-------|------|
| | (a) | (b) | (c) | (d) |
| (1) | (iii) | (ii) | (i) | (iv) |
| (2) | (ii) | (i) | (iii) | (iv) |
| (3) | (ii) | (iii) | (iv) | (i) |
| (4) | (i) | (ii) | (iii) | (iv) |

Ans. (3)

87. Which of the following is a commercial blood cholesterol lowering agent?

- (1) Statin
- (2) Streptokinase
- (3) Lipases
- (4) Cyclosporin A

Ans. (1)

88. Thiobacillus is a group of bacteria helpful in carrying out:

- (1) Chemoautotrophic fixation
- (2) Nitrification
- (3) Denitrification
- (4) Nitrogen fixation

Ans. (3)

89. Polyblend, a fine powder of recycled modified plastic, has proved to be a good material for:

- (1) use as a fertilizer
- (2) construction of roads
- (3) making tubes and pipes
- (4) making plastic sacks

Ans. (2)

90. Select the **correct** sequence of organs in the alimentary canal of cockroach starting from mouth:

- (1) Pharynx → Oesophagus → Gizzard → Crop → Ileum → Colon → Rectum
- (2) Pharynx → Oesophagus → Gizzard → Ileum → Crop → Colon → Rectum
- (3) Pharynx → Oesophagus → Ileum → Crop → Gizzard → Colon → Rectum
- (4) Pharynx → Oesophagus → Crop → Gizzard → Ileum → Colon → Rectum

Ans. (4)

91. Identify the **correct** pair representing the causative agent of typhoid fever and the confirmatory test for typhoid.

- (1) Streptococcus pneumoniae / Widal test
- (2) Salmonella typhi / Anthrone test
- (3) Salmonella typhi / Widal test
- (4) Plasmodium vivax / UTI test

Ans. (3)

92. What would be the heart rate of a person if the cardiac output is 5 L, blood volume in the ventricles at the end of diastole is 100 mL and at the end of ventricular systole is 50 mL?

- (1) 75 beats per minute
- (2) 100 beats per minute
- (3) 125 beats per minute
- (4) 50 beats per minute

Ans. (2)

93. Which of the following statements is **incorrect**?

- (1) Viruses are obligate parasites
- (2) Infective constituent in viruses is the protein coat.
- (3) Prions consist of abnormally folded proteins.
- (4) Viroids lack a protein coat.

Ans. (2)

94. Consider the following statements:

- (A) Coenzyme or metal ion that is tightly bound to enzyme protein is called prosthetic group.
- (B) A complete catalytic active enzyme with its bound prosthetic group is called apoenzyme.

Select the **correct** option.

- (1) (A) is true but (B) is false
- (2) Both (A) and (B) are false
- (3) (A) is false but (B) is true
- (4) Both (A) and (B) are true

Ans. (2)

95. What map unit (Centimorgan) is adopted in the construction of genetic maps?

- (1) A unit of distance between two expressed genes, representing 100% cross over
- (2) A unit of distance between genes on chromosomes, representing 1% cross over.
- (3) A unit of distance between genes on chromosome, representing 50% cross over.
- (4) A unit of distance between two expressed genes, representing 10% cross over.

Ans. (2)

96. Extrusion of second polar body from egg nucleus occurs:

- (1) after fertilization
- (2) before entry of sperm into ovum
- (3) simultaneously with first cleavage
- (4) after entry of sperm but before fertilization

Ans. (4)

97. What is the site of perception of photoperiod necessary for induction of flowering in plants?

- (1) Pulvinus
- (2) Shoot apex
- (3) Leaves
- (4) Lateral buds

Ans. (3)

98. Match the following organisms with their respective characteristics:

- | | |
|-------------------|--------------------------|
| (a) Pila | (i) Flame cells |
| (b) Bombyx | (ii) Comb plates |
| (c) Pleurobrachia | (iii) Radula |
| (d) Taenia | (iv) Malpighaian tubules |

Select the correct option from the following:

- | | | | |
|-----------|------|-------|------|
| (a) | (b) | (c) | (d) |
| (1) (iii) | (iv) | (ii) | (i) |
| (2) (ii) | (iv) | (iii) | (i) |
| (3) (iii) | (ii) | (iv) | (i) |
| (4) (iii) | (ii) | (i) | (iv) |

Ans. (1)

99. The correct sequence of phases of cell cycle is:

- (1) $G_1 \rightarrow G_2 \rightarrow S \rightarrow M$
- (2) $S \rightarrow G_1 \rightarrow G_2 \rightarrow M$
- (3) $G_1 \rightarrow S \rightarrow G_2 \rightarrow M$
- (4) $M \rightarrow G_1 \rightarrow G_2 \rightarrow S$

Ans. (3)

100. Which of the following protocols did aim for reducing emission of chlorofluorocarbons into the atmosphere?

- (1) Kyoto Protocol
- (2) Gothenburg Protocol
- (3) Geneva Protocol
- (4) Montreal Protocol

Ans. (4)

101. Match the following organisms with the products they produce:

- | | |
|------------------------------|-------------------|
| (a) Lactobacillus | (i) Cheese |
| (b) Saccharomyces cerevisiae | (ii) Curd |
| (c) Aspergillus niger | (iii) Citric Acid |
| (d) Acetobacter aceti | (iv) Bread |
| | (v) Acetic Acid |

Select the correct option.

- | | | | |
|-----------|------|-------|-------|
| (a) | (b) | (c) | (d) |
| (1) (ii) | (iv) | (iii) | (v) |
| (2) (iii) | (iv) | (v) | (i) |
| (3) (ii) | (i) | (iii) | (v) |
| (4) (ii) | (iv) | (v) | (iii) |

Ans. (1)

102. Which of the following contraceptive methods do involve a role of hormone?

- (1) Barrier method, Lactational amenorrhoea, Pills
- (2) CuT, Pills, Emergency contraceptives
- (3) Pills, Emergency contraceptives, Barrier methods
- (4) Lactational amenorrhoea, Pills, Emergency contraceptives

Ans. (4)

103. Which of the following sexually transmitted diseases is not completely curable?

- (1) Genital warts
- (2) Genital herpes
- (3) Chlamydia
- (4) Gonorrhoea

Ans. (2)

104. The frequency of recombination between gene pairs on the same chromosome as a measure of the distance between genes was explained by:

- (1) Gregor J. Mendel
- (2) Alfred Sturtevant
- (3) Sutton Boveri
- (4) T.H. Morgan

Ans. (2)

105. From evolutionary point of view, retention of the female gametophyte with developing young embryo on the parent sporophyte for some time, is first observed in:

- (1) Mosses
- (2) Pteridophyte
- (3) Gymnosperms
- (4) Liverworts

Ans. (2)

106. What is the direction of movement of sugars in phloem?

- (1) Upwards (2) Downward
(3) Bi-directional (4) Non-multidirectional

Ans. (3)

107. The Earth Summit held in Rio de Janeiro in 1992 was called:

- (1) for conservation of biodiversity and sustainable utilization of its benefits
(2) to assess threat posed to native species by invasive weed species.
(3) for immediate steps to discontinue use of CFCs that were damaging the ozone layer.
(4) to reduce CO₂ emissions and global warming.

Ans. (1)

108. Use of an artificial kidney during hemodialysis may result in:

- (a) Nitrogenous waste build-up in the body
(b) Non-elimination of excess potassium ions
(c) Reduced absorption of calcium ions from gastro-intestinal tract
(d) Reduced RBC production

Which of the following options is the most appropriate? <http://www.xamstudy.com>

- (1) (b) and (c) are correct
(2) (c) and (d) are correct
(3) (a) and (d) are correct
(4) (a) and (b) are correct

Ans. (2)

109. Conversion of glucose to glucose-6-phosphate, the first irreversible reaction of glycolysis, is catalyzed by:

- (1) Hexokinase (2) Enolase
(3) Phosphofructokinase
(4) Aldolase

Ans. (1)

110. Which one of the following statements regarding post-fertilization development in flowering plants is **incorrect**?

- (1) Zygote develops into embryo
(2) Central cells develops into endosperms
(3) Ovules develop into embryo sac
(4) Ovary develops into fruit.

Ans. (3)

111. Consider following features:

- (a) Organ system level of organisation
(b) Bilateral symmetry
(c) True coelomates with segmentation of body

Select the **correct** option of animal groups which possess all the above characteristics

- (1) Annelida, Arthropoda and Mollusca
(2) Arthropoda, Mollusca and Chordata
(3) Annelida, Mollusca and Chordata
(4) Annelida, Arthropoda and Chordata

Ans. (4)

112. Select the **correct** group of biocontrol agents.

- (1) Trichoderma, Baculovirus, Bacillus thuringiensis
(2) Oscillatoria, Rhizobium, Trichoderma
(3) Nostoc, Azospirillum, Nucleopolyhedrovirus
(4) Bacillus thuringiensis, Tobacco mosaic virus, Aphids

Ans. (1)

113. Identify the cells whose secretion protects the lining of gastro-intestinal tract from various enzymes.

- (1) Goblet Cells (2) Oxyntic Cells
(3) Duodenal Cells (4) Chief Cells

Ans. (1)

114. Which one of the following equipments is essentially required for growing microbes on a large scale, for industrial production of enzymes?

- (1) Sludge digester (2) Industrial oven
(3) Bioreactor (4) BOD incubator

Ans. (3)

115. Which of the following is **true** for Golden rice?

- (1) It is pest resistant, with a gene from Bacillus thuringiensis.
(2) It is drought tolerant, developed using Agrobacterium vector.
(3) It has yellow grains, because of a gene introduced from a primitive variety of rice.
(4) It is Vitamin A enriched, with a gene from daffodil.

Ans. (4)

116. Which of the following statements is **correct**?
- (1) Cornea consists of dense connective tissue of elastin and can repair itself.
 - (2) Cornea is convex, transparent layer which is highly vascularised.
 - (3) Cornea consists of dense matrix of collagen and is the most sensitive portion of the eye.
 - (4) Cornea is an external, transparent and protective proteinaceous covering of the eye-ball.

Ans. (4)

117. Respiratory Quotient (RQ) value of tripalmitin is
- (1) 0.7
 - (2) 0.07
 - (3) 0.09
 - (4) 0.9

Ans. (1)

118. Which of these following methods is the most suitable for disposal of nuclear waste?
- (1) Bury the waste under Antarctic ice-cover
 - (2) Dump the waste within rocks under deep ocean
 - (3) Bury the waste within rocks deep below the Earth's surface
 - (4) Shoot the waste into space

Ans. (3)

119. Match the **Column-I** with **Column -II**

Column-I	Column-II
(a) P-wave	(i) Depolarisation of ventricles
(b) QRS complex	(ii) Repolarisation of ventricles
(c) T-wave	(iii) Coronary ischemia
(d) Reduction in the size of T-wave	(iv) Depolarisation of atria
	(v) Repolarisation of atria

Select the **correct** option.

- | | | | |
|-----|------|-------|------|
| (a) | (b) | (c) | (d) |
| (1) | (iv) | (i) | (ii) |
| (2) | (ii) | (i) | (v) |
| (3) | (ii) | (iii) | (v) |
| (4) | (iv) | (i) | (ii) |

Ans. (4)

120. Tidal Volume and Expiratory Reserve volume of an athlete is 500 mL and 1000 mL respectively. What will be his Expiratory Capacity if the Residual Volume is 1200 mL?
- (1) 1700 mL
 - (2) 2200 mL
 - (3) 2700 mL
 - (4) 1500 mL

Ans. (4)

121. Which of the following is the most important cause for animals and plants being driven to extinction?
- (1) Drought and floods
 - (2) Economic exploitation
 - (3) Alien species invasion
 - (4) Habitat loss and fragmentation

Ans. (4)

122. Select the correctly written scientific name of Mango which was first described by Carolus Linnaeus : <http://www.xamstudy.com>
- (1) *Mangifera indica* Linn.
 - (2) *Mangifera indica*
 - (3) *Mangifera Indica*
 - (4) *Mangifera indica* Car. Linn

Ans. (1)

123. Following statements describe the characteristics of the enzyme Restriction Endonuclease. Identify the incorrect statement.
- (1) The enzyme binds DNA at specific sites and cuts only one of the two strands
 - (2) The enzyme cuts the sugar-phosphate backbone at specific sites on each strand
 - (3) The enzyme recognizes a specific palindromic nucleotide sequence in the DNA
 - (4) The enzyme cuts DNA molecule at identified position with the DNA

Ans. (1)

124. What is the genetic disorder in which an individual has an overall masculine development, gynaecomastia, and is sterile?
- (1) Klinefelter's syndrome
 - (2) Edward syndrome
 - (3) Down's syndrome
 - (4) Turner's syndrome

Ans. (1)

125. Which of the following pair of organelles does not contain DNA?

- (1) Chloroplast and Vacuoles
- (2) Lysosomes and Vacuoles
- (3) Nuclear envelope and Mitochondria
- (4) Mitochondria and Lysosomes

Ans. (2)

126. How does steroid hormone influence the cellular activities?

- (1) Binding of to DNA and forming a gene-hormone complex
- (2) Activating cyclic AMP located on the cell membrane
- (3) Using aquaporin channels as second messenger
- (4) Changing the permeability of the cell membrane

Ans. (1)

127. Select the correct sequence for transport of sperm cell in male reproductive system

- (1) Seminiferous tubules → Rete testis → Vasa efferentia → Epididymis → Vasa deferens → Ejaculatory duct → Urethra → Urethral meatus
- (2) Seminiferous tubules → Vasa efferentia → Epididymis → Inguinal canal → Urethra
- (3) Testis → Epididymis → Vasa efferentia → Vasa deferens → Ejaculatory duct → Inguinal canal → Urethra → Urethral meatus
- (4) Testis → Epididymis → Vasa efferentia → Rete testis → Inguinal canal → Urethra

Ans. (1)

128. The concept "Omnis cellula-e-cellula" regarding cell division was first proposed by

- (1) Theodore Schwann
- (2) Schleiden
- (3) Aristotle
- (4) Rudolf Virchow

Ans. (4)

129. Drug called 'Heroin' is synthesized by :

- (1) acetylation of morphine
- (2) glycosylation of morphine
- (3) nitration of morphine
- (4) methylation of morphine

Ans. (1)

130. Persistent nucellus in the seed is known as

- (1) Perisperms (2) Hilum
- (3) Tegmen (4) Chalaza

Ans. (1)

131. Due to increasing air-borne allergens and pollutants, many people in urban areas are suffering from respiratory disorder causing wheezing due to

- (1) inflammation of bronchi and bronchioles
- (2) proliferation of fibrous tissues and damage of the alveolar walls
- (3) reduction in the secretion of surfactants by pneumocytes
- (4) benign growth on mucous lining of nasal cavity

Ans. (2)

132. DNA precipitation out of a mixture of biomolecules can be achieved by treatment with :

- (1) Chilled ethanol
- (2) Methanol at room temperature
- (3) Chilled chloroform
- (4) Isopropanol

Ans. (1)

133. Select the hormone-releasing intra-Ureterine Devices

- (1) Multiload 375, Progestasert
- (2) Progestasert, LNG-20
- (3) Lippse Loop, Multiload 375
- (4) Vault, LNG-20

Ans. (2)

134. Which of the following features of genetic code does allow bacteria to produce human insulin by recombinant DNA technology?

- (1) Genetic code is redundant
- (2) Genetic code is nearly universal
- (3) Genetic code is specific
- (4) Genetic code is not ambiguous

Ans. (2)

135. Which part of the brain is responsible for thermoregulation?

- (1) Hypothalamus (2) Corpus Callosum
- (3) Medulla oblongata
- (4) Cerebrum

Ans. (1)

136. For a p-type semiconductor, which of the following statements is true?

- (1) Holes are the majority carriers and trivalent atoms are the dopants.
- (2) Holes are the majority carriers and pentavalent atoms are the dopants.
- (3) Electrons are the majority carriers and pentavalent atoms are the dopants
- (4) Electrons are the majority carriers and trivalent atoms are the dopants

Ans. (1)

137. A body weighs 200 N on the surface of the earth. How much will it weigh half way down to the centre of the earth?

- (1) 200 N
- (2) 250 N
- (3) 100 N
- (4) 150 N

Ans. (3)

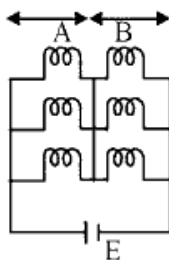
138. In which of the following processes, heat is neither absorbed nor released by a system?

- (1) adiabatic
- (2) isobaric
- (3) isochoric
- (4) isothermal

Ans. (1)

139. Six similar bulbs are connected as shown in the figure with a DC source of emf E , and zero internal resistance.

The ratio of power consumption by the bulbs when (i) all are glowing and (ii) in the situation when two from section A and one from section B are glowing, will be :



- (1) 9 : 4
- (2) 1 : 2
- (3) 2 : 1
- (4) 4 : 9

Ans. (1)

140. A small hole of area of cross-section 2 mm^2 is present near the bottom of a fully filled open tank of height 2 m. Taking $g = 10 \text{ m/s}^2$, the rate of flow of water through the open hole would be nearly.

- (1) $8.9 \times 10^{-6} \text{ m}^3/\text{s}$
- (2) $2.23 \times 10^{-6} \text{ m}^3/\text{s}$
- (3) $6.4 \times 10^{-6} \text{ m}^3/\text{s}$
- (4) $12.6 \times 10^{-6} \text{ m}^3/\text{s}$

Ans. (4)

141. A force $F = 20 + 10y$ acts on a particle in y -direction where F is in newton and y in meter. Work done by this force to move the particle from $y = 0$ to $y = 1 \text{ m}$ is :

- (1) 5 J
- (2) 25 J
- (3) 20 J
- (4) 30 J

Ans. (2)

142. Two point charges A and B, having charges $+Q$ and $-Q$ respectively, are placed at certain distance apart and force acting between them is F . If 25% charge of A is transferred to B, then force between the charges becomes :

- (1) $\frac{9F}{16}$
- (2) $\frac{16F}{9}$
- (3) $\frac{4F}{3}$
- (4) F

Ans. (1)

143. When an object is shot from the bottom of a long smooth inclined plane kept at an angle 60° with horizontal, it can travel a distance x_1 along the plane. But when the inclination is decreased to 30° and the same object is shot with the same velocity, it can travel x_2 distance. Then $x_1 : x_2$ will be :

- (1) $\sqrt{2} : 1$
- (2) $1 : \sqrt{3}$
- (3) $1 : 2\sqrt{3}$
- (4) $1 : \sqrt{2}$

Ans. (2)

144. Pick the wrong answer in the context with rainbow.

- (1) The order of colours is reversed in the secondary rainbow.
- (2) An observer can see a rainbow when his front is towards the sun
- (3) Rainbow is a combined effect of dispersion, refraction and reflection of sunlight.
- (4) When the light rays undergo two internal reflections in a water drop, a secondary rainbow is formed.

Ans. (2)

145. Average velocity of a particle executing SHM in one complete vibration is :

- (1) $A\omega$
- (2) $\frac{A\omega^2}{2}$
- (3) zero
- (4) $\frac{A\omega}{2}$

Ans. (3)

146. The total energy of an electron in an atom in an orbit is -3.4 eV. Its kinetic and potential energies are, respectively :

- (1) -3.4 eV, -6.8 eV (2) 3.4 eV, -6.8 eV
 (3) 3.4 eV, 3.4 eV (4) -3.4 eV, -3.4 eV

Ans. (2)

147. At a point A on the earth's surface the angle of dip, $\delta = +25^\circ$. At a point B on the earth's surface the angle of dip, $\delta = -25^\circ$. We can interpret that :

- (1) A is located in the southern hemisphere and B is located in the northern hemisphere
 (2) A is located in the northern hemisphere and B is located in the southern hemisphere
 (3) A and B are both located in the southern hemisphere
 (4) A and B are both located in the northern hemisphere.

Ans. (2)

148. In which of the following devices, the eddy current effect is not used?

- (1) magnetic braking in train
 (2) electromagnet
 (3) electric heater
 (4) induction furnace

Ans. (3)

149. Two particles A and B are moving in uniform circular motion in concentric circles of radii r_A and r_B with speed v_A and v_B respectively. Their time period of rotation is the same. The ratio of angular speed of A to that of B will be :

- (1) $v_A : v_B$ (2) $r_B : r_A$
 (3) $1 : 1$ (4) $r_A : r_B$

Ans. (3)

150. Two similar thin equi-convex lenses of focal length f each, are kept coaxially in contact with each other such that the focal length of the combination is F_1 . When the space between the two lenses is filled with glycerin (which has the same refractive index ($\mu = 1.5$) as that of glass) then the equivalent focal length is F_2 . The ratio $F_1 : F_2$ will be :

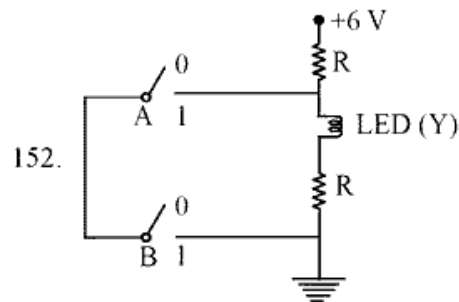
- (1) $1 : 2$ (2) $2 : 3$
 (3) $3 : 4$ (4) $2 : 1$

Ans. (1)

151. An electron is accelerated through a potential difference of $10,000$ V. Its de Broglie wavelength is, (nearly) : ($m_e = 9 \times 10^{-31}$ kg)

- (1) 12.2×10^{-12} m (2) 12.2×10^{-14} m
 (3) 12.2 nm (4) 12.2×10^{-13} m

Ans. (1)



The correct Boolean operation represented by the circuit diagram drawn is :

- (1) OR (2) NAND
 (3) NOR (4) AND

Ans. (2)

153. A soap bubble, having radius of 1 mm, is blown from a detergent solution having a surface tension of 2.5×10^{-2} N/m. The pressure inside the bubble equals at a point Z_0 below the free surface of water in a container. Taking $g = 10$ m/s², density of water = 10^3 kg/m³, the value of Z_0 is :

- (1) 10 cm (2) 1 cm
 (3) 0.5 cm (4) 100 cm

Ans. (1)

154. The displacement of a particle executing simple harmonic motion is given by

$$y = A_0 + A \sin \omega t + B \cos \omega t.$$

- (1) $\sqrt{A^2 + B^2}$ (2) $\sqrt{A_0^2 + (A + B)^2}$
 (3) $A + B$ (4) $A_0 + \sqrt{A^2 + B^2}$

Ans. (2)

155. The work done to raise a mass m from the surface of the earth to a height h , which is equal to the radius of the earth, is :

- (1) 2 mgR (2) $\frac{1}{2}$ mgR
 (3) $\frac{3}{2}$ mgR (4) mgR

Ans. (2)

156. The speed of a swimmer in still water is 20 m/s. The speed of river water is 10 m/s and is flowing due east. If he is standing on the south bank and wishes to cross the river along the shortest path, the angle at which he should make his strokes w.r.t. north is given by :

- (1) 0° (2) 60° west
 (3) 45° west (4) 30° west

Ans. (4)

157. Two parallel infinite line charges with linear charge densities $+\lambda$ C/m and $-\lambda$ C/m are placed at a distance of $2R$ in free space. What is the electric field mid-way between the two line charges?

- (1) $\frac{2\lambda}{\pi\epsilon_0 R}$ N/C (2) $\frac{\lambda}{\pi\epsilon_0 R}$ N/C
 (3) $\frac{\lambda}{2\pi\epsilon_0 R}$ N/C (4) zero

Ans. (2)

158. Which of the following acts as a circuit protection device?

- (1) inductor (2) switch
 (3) fuse (4) conductor

Ans. (3)

159. A parallel plate capacitor of capacitance $20 \mu\text{F}$ is being charged by a voltage source whose potential is changing at the rate of 3 V/s . The conduction current through the connecting wires, and the displacement current through the plates of the capacitor, would be, respectively :

- (1) $60 \mu\text{A}$, $60 \mu\text{A}$ (2) $60 \mu\text{A}$, zero
 (3) zero, zero (4) zero, $60 \mu\text{A}$

Ans. (1)

160. When a block of mass M is suspended by a long wire of length L , the length of the wire becomes $(L + l)$. The elastic potential energy stored in the extended wire is :

- (1) MgL (2) $\frac{1}{2}Mgl$
 (3) $\frac{1}{2}MgL$ (4) Mgl

Ans. (2)

161. A hollow metal sphere of radius R is uniformly charged. The electric field due to the sphere at a distance r from the centre :

- (1) zero as r increases for $r < R$, decreases as r increases for $r > R$
 (2) zero as r increases for $r < R$, increases as r increases for $r > R$
 (3) decreases as r increases for $r < R$ and for $r > R$
 (4) increases as r increases for $r < R$ and for $r > R$

Ans. (1)

162. A mass m is attached to a thin wire and whirled in a vertical circle. The wire is most likely to break when :

- (1) the wire is horizontal
 (2) the mass is at the lowest point
 (3) inclined at an angle of 60° from vertical
 (4) the mass is at the highest point

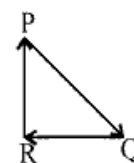
Ans. (2)

163. Which colour of the light has the longest wavelength?

- (1) blue (2) green
 (3) violet (4) red

Ans. (4)

164. A particle moving with velocity \vec{v} is acted by three forces shown by the vector triangle PQR. The velocity of the particle will :



- (1) decrease
 (2) remain constant
 (3) change according to the smallest force \overline{QR}
 (4) increase

Ans. (2)

165. Ionized hydrogen atoms and α -particles with same momenta enters perpendicular to a constant magnetic field B . The ratio of their radii of their paths $r_H : r_\alpha$ will be :

- (1) 1 : 2 (2) 4 : 1
 (3) 1 : 4 (4) 2 : 1

Ans. (4)

166. The unit of thermal conductivity is :

- (1) $\text{J m}^{-1} \text{K}^{-1}$
- (2) W m K^{-1}
- (3) $\text{W m}^{-1} \text{K}^{-1}$
- (4) J m K^{-1}

Ans. (3)

167. A 800 turn coil of effective area 0.05 m^2 is kept perpendicular to a magnetic field $5 \times 10^{-5} \text{ T}$. When the plane of the coil is rotated by 90° around any of its coplanar axis in 0.1 s , the emf induced in the coil will be :

- (1) 0.2 V (2) $2 \times 10^{-3} \text{ V}$
- (3) 0.02 V (4) 2 V

Ans. (3)

168. A disc of radius 2 m and mass 100 kg rolls on a horizontal floor. Its centre of mass has speed of 20 cm/s . How much work is needed to stop it?

- (1) 30 kJ (2) 2 J
- (3) 1 J (4) 3 J

Ans. (4)

169. In an experiment, the percentage of error occurred in the measurement of physical quantities A, B, C and D are 1%, 2%, 3% and 4% respectively. Then the maximum percentage of error in the measurement X, where $X = \frac{A^2 B^{1/2}}{C^{1/3} D^3}$, will be :

- (1) 16% (2) -10%
- (3) 10% (4) $\left(\frac{3}{13}\right)\%$

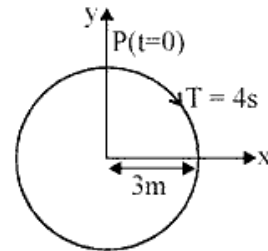
Ans. (1)

170. Body A of mass $4m$ moving with speed u collides with another body B of mass $2m$, at rest. The collision is head on and elastic in nature. After the collision the fraction of energy lost by the colliding body A is :

- (1) $\frac{8}{9}$ (2) $\frac{4}{9}$
- (3) $\frac{5}{9}$ (4) $\frac{1}{9}$

Ans. (1)

171. The radius of circle, the period of revolution, initial position and sense of revolution are indicated in the fig.



y-projection of the radius vector of rotating particle P is

- (1) $y(t) = 4 \sin\left(\frac{\pi t}{2}\right)$, where y in m
- (2) $y(t) = 3 \cos\left(\frac{3\pi t}{2}\right)$, where y in m
- (3) $y(t) = 3 \cos\left(\frac{\pi t}{2}\right)$, where y in m
- (4) $y(t) = -3 \cos 2\pi t$, where y in m

Ans. (3)

172. In total internal reflection when the angle of incidence is equal to the critical angle for the pair of media in contact, what will be angle of refraction?

- (1) 0°
- (2) equal to angle of incidence
- (3) 90°
- (4) 180°

Ans. (3)

173. A solid cylinder of mass 2 kg and radius 4 cm is rotating about its axis at the rate of 3 rpm . The torque required to stop after 2π revolutions is :

- (1) $2 \times 10^{-3} \text{ N m}$
- (2) $12 \times 10^{-4} \text{ N m}$
- (3) $2 \times 10^6 \text{ N m}$
- (4) $2 \times 10^{-6} \text{ N m}$

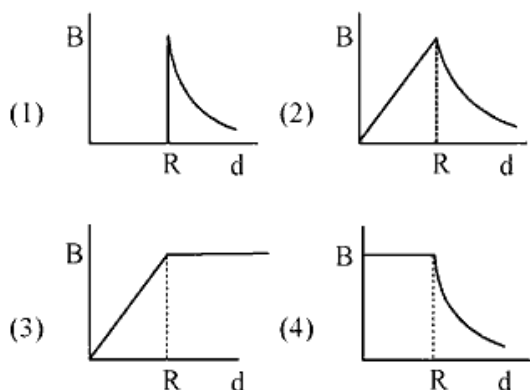
Ans. (4)

174. A block of mass 10 kg is in contact against the inner wall of a hollow cylindrical drum of radius 1 m. The coefficient of friction between the block and the inner wall of the cylinder is 0.1. The minimum angular velocity needed for the cylinder to keep the block stationary when the cylinder is vertical and rotating about its axis, will be : ($g = 10 \text{ m/s}^2$)

- (1) $\frac{10}{2\pi}$ rad/s (2) 10 rad/s
 (3) 10π rad/s (4) $\sqrt{10}$ rad/s

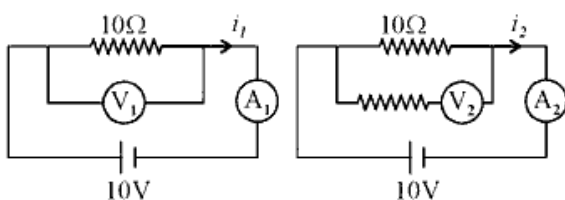
Ans. (2)

175. A cylindrical conductor of radius R is carrying a constant current. The plot of the magnitude of the magnetic field, B with the distance, d , from the centre of the conductor, is correctly represented by the figure :



Ans. (2)

176. In the circuits shown below, the readings of the voltmeters and the ammeters will be :



- (1) $V_1 = V_2$ and $i_1 > i_2$
 (2) $V_1 = V_2$ and $i_1 = i_2$
 (3) $V_2 > V_1$ and $i_1 > i_2$
 (4) $V_2 > V_1$ and $i_1 = i_2$

Ans. (2)

177. Increase in temperature of a gas filled in a container would lead to :

- (1) increase in its kinetic energy
 (2) decrease in its pressure
 (3) decrease in intermolecular distance
 (4) increase in its mass

Ans. (1)

178. A copper rod of 88 cm and an aluminium rod of unknown length have their increase in length independent of increase in temperature. The length of aluminium rod is : ($\alpha_{\text{Cu}} = 1.7 \times 10^{-5} \text{ K}^{-1}$ and $\alpha_{\text{Al}} = 2.2 \times 10^{-5} \text{ K}^{-1}$)

- (1) 113.9 cm (2) 88 cm
 (3) 68 cm (4) 6.8 cm

Ans. (3)

179. α -particle consists of :

- (1) 2 electrons, 2 protons and 2 neutrons
 (2) 2 electrons and 4 protons only
 (3) 2 protons only
 (4) 2 protons and 2 neutrons only

Ans. (4)

180. In a double slit experiment, when light of wavelength 400 nm was used, the angular width of the first minima formed on a screen placed 1 m away, was found to be 0.2° . What will be the angular width of the first minima, if the entire experimental apparatus is immersed in water?

($\mu_{\text{water}} = 4/3$)

- (1) 0.15° (2) 0.05°
 (3) 0.1° (4) 0.266°

Ans. (1)